



$I = ?$  .4 A

Sample Problem 1.




$I = ?$  A .2 A  
 $I = ?$  mA (200 mA)

Sample Problem 2.




$I = ?$  A .05 A  
 $I = ?$  mA 50 mA

Sample Problem 3.




$I = ?$  A .05 A  
 $I = ?$  mA 50 mA

Sample Problem 4.



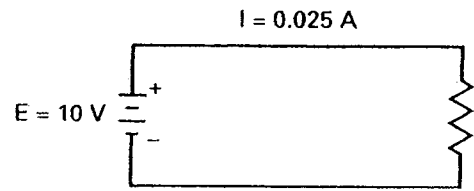
$I = ?$  A .2 A  
 $I = ?$  mA 200 mA

Sample Problem 5.



$I = ?$  A .5 A  
 $I = ?$  mA 500 mA

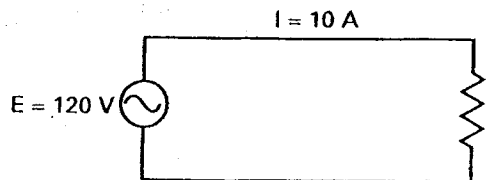
Sample Problem 6.



$I = 0.025$  A

$P = ?$  W .25 W

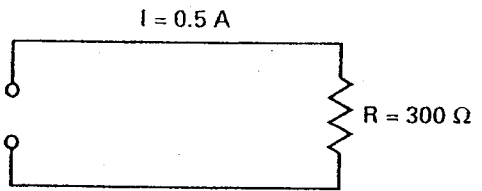
Sample Problem 7.



$I = 10$  A

$P = ?$  W 1200 W


Sample Problem 8.



$I = 0.5$  A

$P = ?$  W 75 W

Sample Problem 9.



$P = ?$  W .1 W

Sample Problem 10.